


SOLID FIGURES - Check Yourself

Trace the solid figures. Write the name of each shape and how many faces, edges and vertices each shape has.



Shape: _____

Faces: _____

Edges: _____

Vertices: _____




Shape: _____

Faces: _____

Edges: _____

Vertices: _____

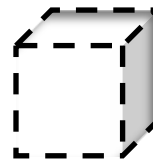


Shape: _____

Faces: _____

Edges: _____

Vertices: _____




Shape: _____

Faces: _____

Edges: _____

Vertices: _____



Shape: _____

Faces: _____

Edges: _____

Vertices: _____



Shape: _____


Faces: _____

Edges: _____

Vertices: _____

SOLID FIGURES - Check Yourself **ANSWER KEY**


Trace the solid figures. Write the name of each shape and how many faces, edges and vertices each shape has.



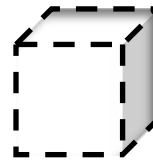
Shape: sphere
Faces: 0
Edges: 0
Vertices: 0



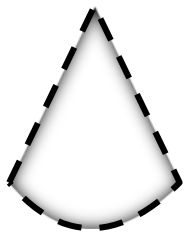
Shape: cylinder
Faces: 2
Edges: 0
Vertices: 0




Shape: prism
Faces: 6
Edges: 12
Vertices: 8



Shape: cube
Faces: 6
Edges: 12
Vertices: 8



Shape: cone
Faces: 1
Edges: 0
Vertices: 1



Shape: pyramid
Faces: 5
Edges: 8
Vertices: 5