



SYMMETRY


Find how many lines of symmetry the following figures have.



_____ lines of symmetry



_____ lines of symmetry



_____ line of symmetry



_____ lines of symmetry