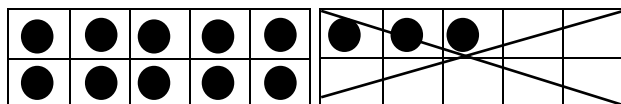


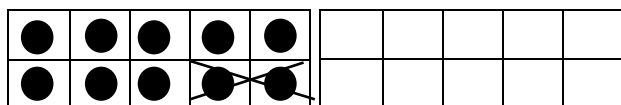
Subtraction: Models

What subtraction sentences do the following models show?

Step 1

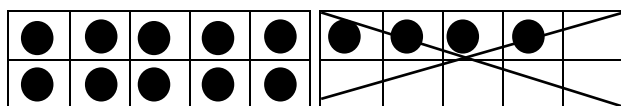


Step 2

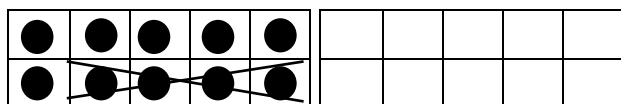


$$\underline{\quad} - \underline{\quad} - \underline{\quad} = \underline{\quad}$$

Step 1

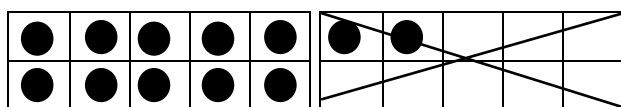


Step 2

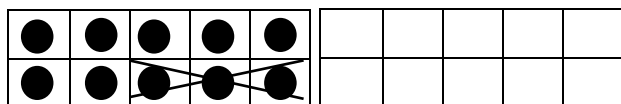


$$\underline{\quad} - \underline{\quad} - \underline{\quad} = \underline{\quad}$$

Step 1



Step 2



$$\underline{\quad} - \underline{\quad} - \underline{\quad} = \underline{\quad}$$